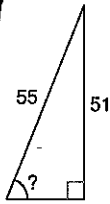


# Act. #25

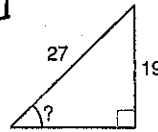
# Finding Angles Using Soh-Cah-Toa

Find the measure of the indicated angle to the nearest degree.

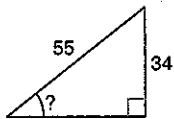
1



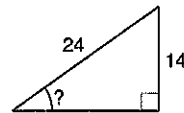
2



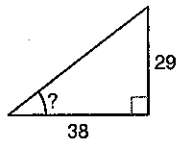
3



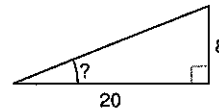
4



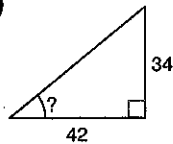
5



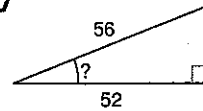
6



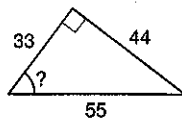
7



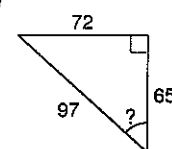
8



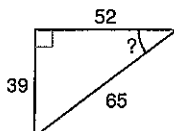
9



10



11



12

